



**Holy Eucharist Catholic Primary School**

**1a Oleander Drive, St Albans South. VIC 3021**

**Phone: 8312 0900 Fax: 9366 8192**

**[www.hestalbanssth.catholic.edu.au](http://www.hestalbanssth.catholic.edu.au)**



# **Grade 3**

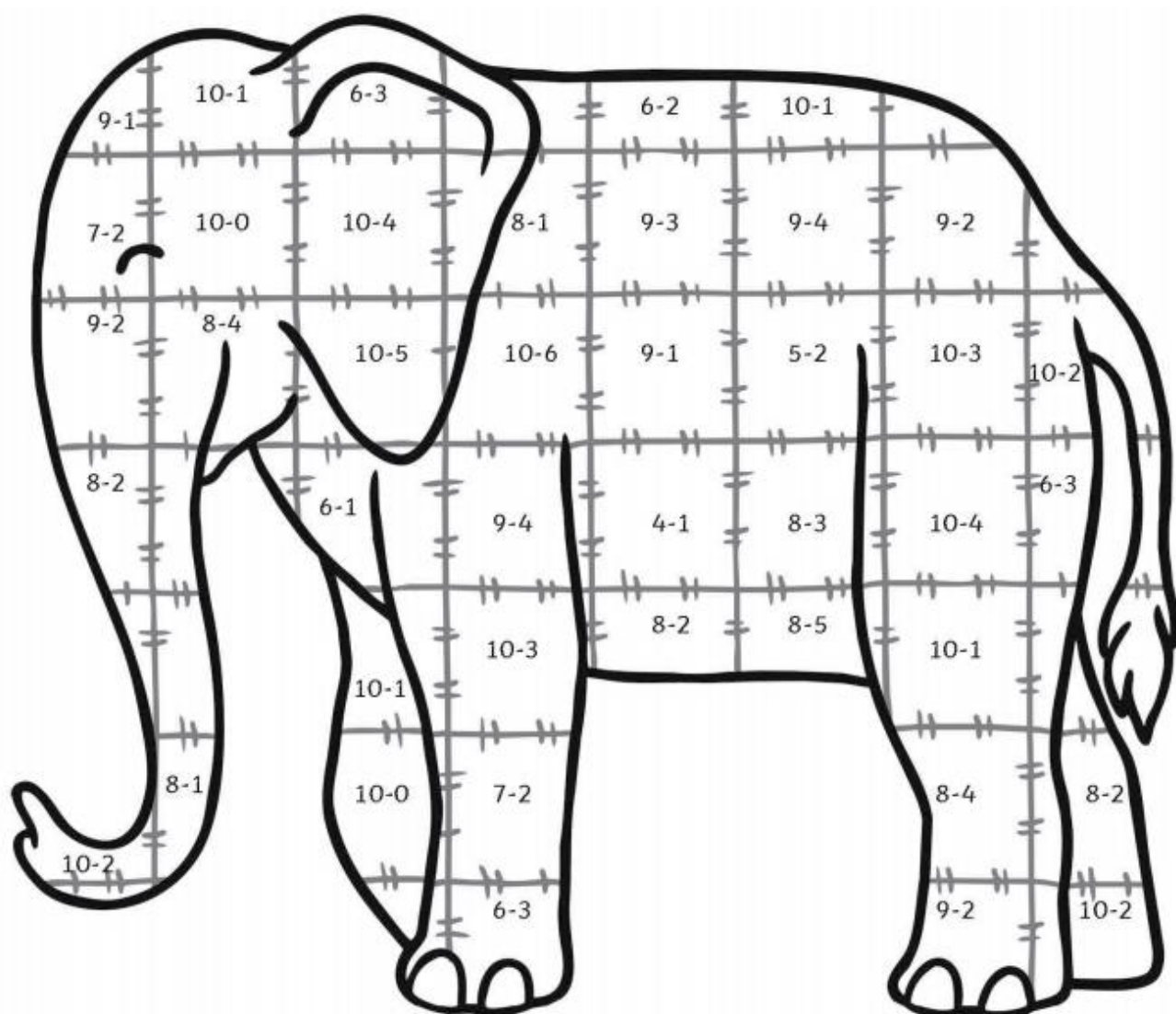
## **Modified Remote Learning Pack**

**Week Beginning - Monday 9<sup>th</sup> August 2021**

**Name:** \_\_\_\_\_

**Grade:** \_\_\_\_\_

# Page 1



3 = yellow

4 = orange

5 = blue

6 = red

7 = purple

8 = black

9 = pink

10 = green

## Superhero Missing Numbers

Can you find the missing numbers?

$$5 + \text{ } = 10$$

$$10 = 2 + \text{ }$$

$$\text{ } + 3 = 10$$

$$10 = \text{ } + 8$$

$$7 + \text{ } = 10$$


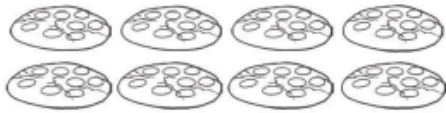




$$\text{ } + 4 = 10$$

$$10 + \text{ } = 10$$



## Page 3

Use a pencil to share these tasty goodies equally between different numbers of people.

e.g. Share between 3 	How many does each person get? ① 2 3 4	What does the calculation look like? $3 \div 3 = \textcircled{1}$
a. Share between 2 	2 3 4 5	$8 \div 2 =$
b. Share between 4 	2 3 4 5	$12 \div 4 =$
c. Share between 3 	2 3 4 5	$12 \div 3 =$
d. Share between 5 	2 3 4 5	$10 \div 5 =$
e. Share between 2 	2 3 4 5	$10 \div 2 =$

# Page 4

Add ? or ! to complete these sentences.

Is she looking at them

Look at that



Circle the words you think should have a capital letter.

tom i me  
said brazil



Write the full sentence adding 'and'.

My ring was round had a green stone.

\_\_\_\_\_



Add the prefix 'un' to these words to change the verbs to their opposites.

zip \_\_\_\_\_

well \_\_\_\_\_



Practise writing these tricky word spellings.


out \_\_\_\_\_

your \_\_\_\_\_

oh \_\_\_\_\_

could \_\_\_\_\_

Which tricky word has Mr Whoops been juggling with?



## Building Bricks Multiplication


Can you add the bumps on the building bricks to complete these multiplication calculations?

1.   $2 + 2 + 2 = \square$   $3 \times 2 = \square$


2.   $4 + 4 = \square$   $2 \times 4 = \square$

3.   $3 + 3 = \square$   $2 \times 3 = \square$

4.   $3 + 3 + 3 = \square$   $3 \times 3 = \square$

5.   $1 + 1 + 1 + 1 = \square$   $4 \times 1 = \square$

6.   $2 + 2 + 2 + 2 + 2 = \square$   $5 \times 2 = \square$

7.   $1 + 1 + 1 + 1 + 1 + 1 + 1 + 1 = \square$   $8 \times 1 = \square$

8.   $4 + 4 + 4 + 4 = \square$   $4 \times 4 = \square$

9.   $2 + 2 + 2 + 2 + 2 + 2 = \square$   $6 \times 2 = \square$

10.   $4 + 4 + 4 + 4 + 4 = \square$   $5 \times 4 = \square$

## Phonics Activity Mat

Read these words to a friend.

sheek



landing

rarch



tinfoil

flink



brain

streze



classic

slingpang



quick

Write the real words next to the chest and the nonsense words next to the bin.

bands

segg

melting

street

ploop

sernd

lunch

yapher



\_\_\_\_\_

\_\_\_\_\_

\_\_\_\_\_



\_\_\_\_\_

\_\_\_\_\_

\_\_\_\_\_

Circle all of the words that contain the **ew** digraph.

cream

birthday

bench

chicken

threw

winter

flew

nephew

Add the sound buttons to these words.

crayon

donkey

yawning

Write the missing sounds in these words.



fl\_\_er



t\_\_d



t\_\_ch



bedr\_\_m



coff\_\_



\_\_eel



b\_\_ts



p\_\_son



gr\_\_m



fl\_\_m\_\_

Write a word that contains **ow**.

\_\_\_\_\_

## Block Adventurer Mosaic

Read the words in the grid below and use the key to colour in the squares to reveal the hidden picture.

skin tone = **bl**    yellow = **fl**    red = **fr**    black = **cl**    light blue = **sm**

smight	smair	smelt	flop	flight	flung	small	smear	smart
smat	smurg	smack	blund	blur	blare	flow	smug	smight
smell	smog	smooth	blend	black	blonde	floor	smell	smash
smash	smat	fried	free	friend	flan	fright	smooth	smair
smirk	smold	frigid	frisk	fret	flit	frog	smutt	smoky
smear	smart	freeze	frown	from	friz	frat	smook	smight
smug	smight	bloop	club	clear	clap	bloom	smat	smurg
smell	smash	smelt	clip	smook	clan	smold	smell	smog
smooth	smair	smack	clink	smerk	clam	smart	smash	smat
smutt	smoky	smooth	claw	smaze	clog	smight	smirk	smold