

Grade 3

Modified Remote Learning Pack

Week Beginning - Monday 25th October

Name: _____

Grade: _____

High Frequency Words Handwriting

Oxford Words Handwriting

I am going with them to the zoo.

them

them

them

I am going with them to the zoo.

I am going with them to the zoo.

I am going with them to the zoo.

Halloween

Halloween is celebrated on 31st October every year.

Going trick-or-treating is a traditional

Halloween activity.

Dressing up in costumes is a fun part of

Halloween.





Emotions



n s u r p r i s e d d
u b q s a t l e z z h
y l k v a e q s y x a
g r u m p y v l j t p
c a l m j f l q c v p
b o r e d i a n g r y
q f r u s t r a t e d
n i s h y s c a r e d
e m b a r r a s s e d
v c o n f u s e d k c
j a s y h a r s i r h



happy
angry
embarrassed
scared

surprised
shy
bored
confused

silly
calm
grumpy
frustrated




All About Rainbows

A rainbow is a colourful arc that we see in the sky.

A rainbow is made of light.


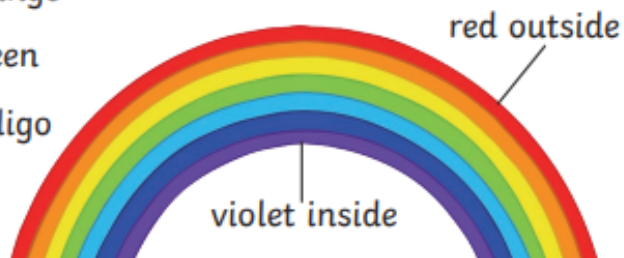


A rainbow happens when it is sunny and rainy at the same time.



There are seven colours in a rainbow:

- | | |
|--|--|
|  red |  orange |
|  yellow |  green |
|  blue |  indigo |
|  violet | |



Did You Know...?

Rainbows are full circles.

On the ground, we only see half of a rainbow.

We can only see a full rainbow from above.

Questions

1. When do we see rainbows? **Tick one.**

- ☐ when it's rainy and sunny
- ☐ when it's dark
- ☐ when it's windy

2. What is a rainbow made of? **Tick one.**

- ☐ sound
- ☐ light
- ☐ glass

3. How many colours are there in a rainbow? **Tick one.**

- ☐ seven
- ☐ six
- ☐ ten






















4. Which of these colours is **not** in a rainbow? **Tick one.**

- ☐ red
- ☐ brown
- ☐ blue

5. How can you see a full circle rainbow? **Tick one.**

- ☐ from indoors
- ☐ from below
- ☐ from above

Compass Directions


		bakery 			mosque 	
church 		park 		hospital 		
	taxi rank 		postbox 			cafe 
fire station 		toy shop 		airport 		
	school 		vet 		pool 	
theme park 		police station 				beach 
bus stop 		dentist 	Start 		supermarket 	

Compass directions: the town

1. From the start, go north 4 squares. Where are you now?
2. Go east 3 squares. Where are you now?
3. Go south 3 squares. Where are you now?
4. Go west 6 squares. Where are you now?
5. Go east 2 squares. Where are you now?
6. Start at the school. How do you get to the taxi rank?
7. Give directions from the dentist to the toy shop.



Animal Grid References



Write the coordinates of each animal.

Zebra _____	Panda _____	Giraffe _____
Mouse _____	Snake _____	Penguin _____
Tiger _____	Lion _____	Elephant _____
Hippo _____	Monkey _____	Rabbit _____

Directions in the City



1. Write the missing directions to get to the right shops. How do you get to...?

- The butchers: Go straight ahead. Take the first left. Turn left. It's on the right.
- The bakery: Go straight ahead. _____
- The grocer's: _____
- The pharmacy: _____
- The kiosk: _____
- The supermarket: _____

2. Choose a shop and write the directions. Your partner has to work out where you're going!

Halloween Spooky Symmetry

Draw the other half of the spooky drawing to make it symmetrical. Remember, if you colour it in, the colours should also be symmetrical.

